

Disney
Learning

Disney
PRINCESS

& Subtraction



Bendon Publishing International, Inc.
Ashland, OH 44805
www.bendonpub.com

©2005 Disney Enterprises, Inc.





The answer to a subtraction problem is called a **DIFFERENCE**. You write the subtraction problem or equation like this: **5-1=4**


Cross out the pictures below to help you find the difference in each problem.




$$5 - 1 = \underline{4}$$




$$9 - 7 = \underline{\quad}$$



$$7 - 4 = \underline{\quad}$$



$$8 - 3 = \underline{\quad}$$



$$10 - 6 = \underline{\quad}$$




Help Aurora subtract the problems below.
Circle the rose that has the correct difference for each problem below.

$7 - 2 =$



$4 - 3 =$



$7 - 2 =$



$8 - 1 =$



$4 - 3 =$



$9 - 0 =$



$8 - 1 =$



$4 - 2 =$



$5 - 2 =$



$5 - 4 =$



$8 - 2 =$



$7 - 1 =$



$6 - 3 =$



$4 - 3 =$




$6 - 1 =$





Ariel needs your help to find the colors. Subtract to find the difference. Then match the answer to the numbers on the fish to color the pictures.




$$8 - 3 = \underline{\quad\quad} \text{ Yellow} \quad 4 - 2 = \underline{\quad\quad} \text{ Red}$$

$$9 - 5 = \underline{\quad\quad} \text{ Green} \quad 9 - 6 = \underline{\quad\quad} \text{ Blue}$$





Flounder uses a number line to help him learn how to subtract. Start at 5 and count back 3 numbers. The difference of $5 - 3$ is 2.



Use the number line to help you find the difference in each problem.

Start at 10, Jump back 2, Land on 8.
 $10 - 2 = 8$

$12 - 2 = \underline{\quad}$

$17 - 7 = \underline{\quad}$

$6 - 3 = \underline{\quad}$

$5 - 4 = \underline{\quad}$

$14 - 11 = \underline{\quad}$

$8 - 4 = \underline{\quad}$

$13 - 6 = \underline{\quad}$

$12 - 5 = \underline{\quad}$

$9 - 7 = \underline{\quad}$

$11 - 9 = \underline{\quad}$

$16 - 8 = \underline{\quad}$

$4 - 2 = \underline{\quad}$

$5 - 1 = \underline{\quad}$

$14 - 7 = \underline{\quad}$

$7 - 3 = \underline{\quad}$

$16 - 6 = \underline{\quad}$

$10 - 5 = \underline{\quad}$

$9 - 5 = \underline{\quad}$

$18 - 8 = \underline{\quad}$

$11 - 5 = \underline{\quad}$

$15 - 7 = \underline{\quad}$

$8 - 2 = \underline{\quad}$

$9 - 8 = \underline{\quad}$

$6 - 5 = \underline{\quad}$

$20 - 10 = \underline{\quad}$





Solve the subtraction problems below. Then use the code to match the numbers with letters. Write the letters on the lines in the box below to find the names of Jasmine's friends.



$8 - 1 = \underline{7} = H$

$9 - 0 = \underline{\quad} = J$

$5 - 3 = \underline{\quad} = R$

$7 - 6 = \underline{\quad} = N$

$9 - 1 = \underline{\quad} = I$

$6 - 2 = \underline{\quad} = D$

$6 - 3 = \underline{\quad} = L$

$9 - 4 = \underline{\quad} = A$




Answer:

| | | | | | | | |
|----------|----------|----------|----------|----------|----------|----------|----------|
| <u>5</u> | <u>3</u> | <u>5</u> | <u>4</u> | <u>4</u> | <u>8</u> | <u>1</u> | |
| <u>5</u> | <u>1</u> | <u>4</u> | | <u>2</u> | <u>5</u> | <u>9</u> | <u>5</u> |
| | | | | | | | <u>7</u> |



Read and solve the subtraction problems with Aurora.



1. Aurora took 5 baskets with her to pick berries. She lost 2 of them in the woods. How many baskets did she have when she returned home?

Aurora has _____ baskets. $5 - 2 =$

2. While she was walking, Aurora saw 9 horses in the forest. As she was watching, 5 ran away. How many horses were left?

There were _____ horses left.

3. Aurora went to a ball at the palace. She saw 12 people dancing. 6 people grew tired and sat down. How many people were left on the dance floor?

There were _____ people left dancing.

4. While walking one day, Aurora stopped to watch 14 beautiful birds. Soon, 7 flew away. How many birds were left?

There were _____ birds left.

5. Aurora went to visit the good fairies. She picked 16 flowers for them. She put 8 of them in a vase. How many flowers are left in her hand?

There were _____ flowers left in her hand.



Help Jasmine find the differences below.



$$\begin{array}{r} 1. \quad + 0 \\ 12 \\ - 02 \\ \hline 10 \end{array}$$

$$\begin{array}{r} 2. \quad 3 \\ - 1 \\ \hline \end{array}$$

$$\begin{array}{r} 3. \quad 18 \\ - 1 \\ \hline \end{array}$$

$$\begin{array}{r} 4. \quad 12 \\ - 11 \\ \hline \end{array}$$

$$\begin{array}{r} 5. \quad 10 \\ - 3 \\ \hline \end{array}$$

$$\begin{array}{r} 6. \quad 6 \\ - 4 \\ \hline \end{array}$$

$$\begin{array}{r} 7. \quad 8 \\ - 7 \\ \hline \end{array}$$

$$\begin{array}{r} 8. \quad 18 \\ - 5 \\ \hline \end{array}$$

$$\begin{array}{r} 9. \quad 12 \\ - 7 \\ \hline \end{array}$$

$$\begin{array}{r} 10. \quad 9 \\ - 2 \\ \hline \end{array}$$

$$\begin{array}{r} 11. \quad 18 \\ - 7 \\ \hline \end{array}$$

$$\begin{array}{r} 12. \quad 11 \\ - 9 \\ \hline \end{array}$$

$$\begin{array}{r} 13. \quad 17 \\ - 4 \\ \hline \end{array}$$

$$\begin{array}{r} 14. \quad 13 \\ - 3 \\ \hline \end{array}$$

$$\begin{array}{r} 15. \quad 15 \\ - 1 \\ \hline \end{array}$$

$$\begin{array}{r} 16. \quad 10 \\ - 0 \\ \hline \end{array}$$

$$\begin{array}{r} 17. \quad 8 \\ - 5 \\ \hline \end{array}$$

$$\begin{array}{r} 18. \quad 18 \\ - 8 \\ \hline \end{array}$$

$$\begin{array}{r} 19. \quad 11 \\ - 7 \\ \hline \end{array}$$

$$\begin{array}{r} 20. \quad 14 \\ - 6 \\ \hline \end{array}$$

$$\begin{array}{r} 21. \quad 16 \\ - 2 \\ \hline \end{array}$$

$$\begin{array}{r} 22. \quad 12 \\ - 0 \\ \hline \end{array}$$

$$\begin{array}{r} 23. \quad 10 \\ - 6 \\ \hline \end{array}$$