


# Mr. Battaglia's Superhero's Tell Time Packet








Telling Time


Name: \_\_\_\_\_

**Lesson 6.1** Telling Time to the Hour4 o'clock  
4:00

Both clocks show 4 o'clock, or 4:00.

Write the time two ways.


7 o'clock  
7:00\_\_\_\_\_ o'clock  
: \_\_\_\_\_\_\_\_\_\_ o'clock  
: \_\_\_\_\_\_\_\_\_\_ o'clock  
: \_\_\_\_\_\_\_\_\_\_ o'clock  
: \_\_\_\_\_\_\_\_\_\_ o'clock  
: \_\_\_\_\_\_\_\_\_\_ o'clock  
: \_\_\_\_\_\_\_\_\_\_ o'clock  
: \_\_\_\_\_\_\_\_\_\_ o'clock  
: \_\_\_\_\_

**Lesson 6.2** Telling Time to the Half Hour

7 o'clock  
7:00



half past 7  
7:30



8 o'clock  
8:00

Write the time two ways.



half past 4  
4:30



half past 10  
: \_\_\_\_\_



half past \_\_\_\_\_  
: \_\_\_\_\_




half past \_\_\_\_\_  
: \_\_\_\_\_



half past \_\_\_\_\_  
: \_\_\_\_\_



half past \_\_\_\_\_  
: \_\_\_\_\_



half past \_\_\_\_\_  
: \_\_\_\_\_



half past \_\_\_\_\_  
: \_\_\_\_\_




half past \_\_\_\_\_  
: \_\_\_\_\_




Name: \_\_\_\_\_


Date: \_\_\_\_\_




\_\_\_\_\_  
Hour    Min




\_\_\_\_\_  
:




\_\_\_\_\_  
hour    min




\_\_\_\_\_  
:




\_\_\_\_\_  
:




\_\_\_\_\_  
:



\_\_\_\_\_  
:




\_\_\_\_\_  
:

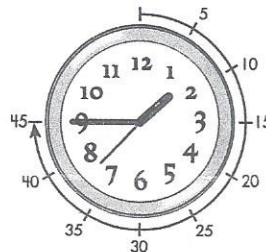


\_\_\_\_\_  
:




**Lesson 6.3** Telling Time to the Quarter Hour

1:15  
one fifteen




1:45  
one forty-five


Read the time on the first clock.  
Write the same time on the second clock.



6:45




:




:



:



:




:



**Lesson 6.3** Problem Solving


Solve each problem.

The small hand is between 3 and 4.The large hand is on the 6.The time is 3:30.

The small hand is between \_\_\_\_\_ and \_\_\_\_\_.

The large hand is on the \_\_\_\_\_.


The time is \_\_\_\_\_:\_\_\_\_\_.



The small hand is on the \_\_\_\_\_.

The large hand is on the \_\_\_\_\_.


The time is \_\_\_\_\_:\_\_\_\_\_.



The small hand is between \_\_\_\_\_ and \_\_\_\_\_.

The large hand is on the \_\_\_\_\_.


The time is \_\_\_\_\_:\_\_\_\_\_.



The small hand is on the \_\_\_\_\_.

The large hand is on the \_\_\_\_\_.

The time is \_\_\_\_\_:\_\_\_\_\_.

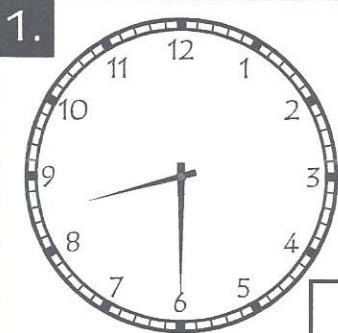


Name: \_\_\_\_\_

# WHAT TIME IS IT?

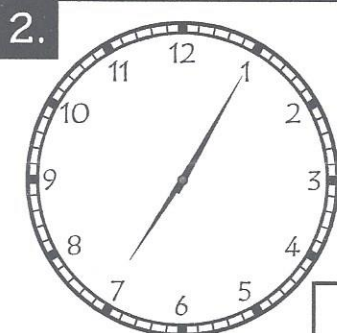
1

Write the time in words and in digital form underneath each clock. The first one is done for you.



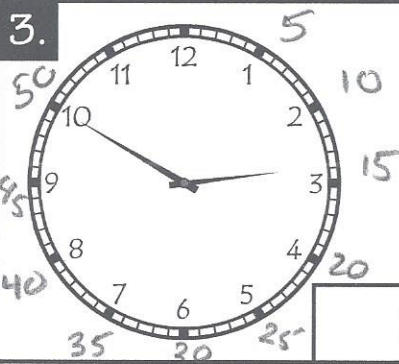
8:30

It's half past eight.




:

It's 5 minutes after 7



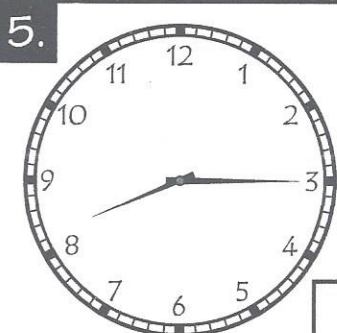
:

It's 50 minutes after 2



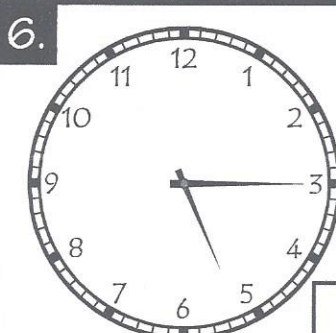
:

It's \_\_\_\_\_



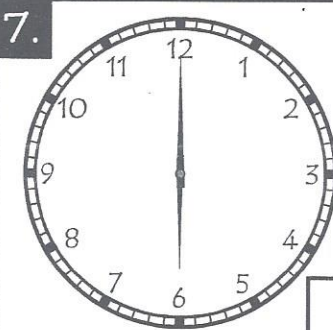
:

It's \_\_\_\_\_ minutes after 8



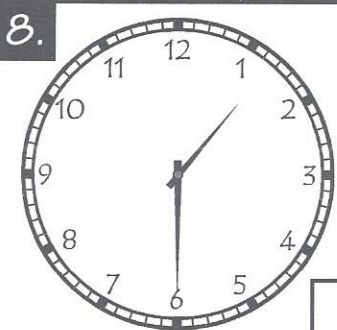
:

It's \_\_\_\_\_ minutes after \_\_\_\_\_




:

It's 0'clock




:

It's half past \_\_\_\_\_



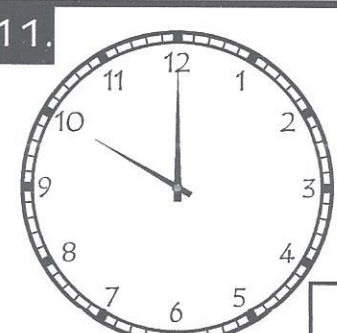
:

It's \_\_\_\_\_ minutes after \_\_\_\_\_



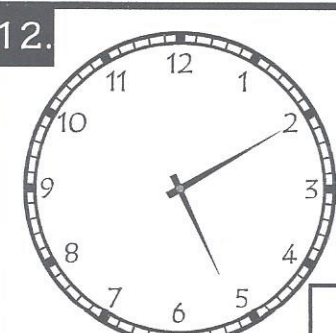
:

It's \_\_\_\_\_ minutes after \_\_\_\_\_



:

It's \_\_\_\_\_ o'clock




:

It's \_\_\_\_\_ minutes after \_\_\_\_\_




Name: \_\_\_\_\_


Date: \_\_\_\_\_




\_\_\_\_\_ : \_\_\_\_\_




\_\_\_\_\_ : \_\_\_\_\_




\_\_\_\_\_ : \_\_\_\_\_




\_\_\_\_\_ : \_\_\_\_\_  
hour min




\_\_\_\_\_ : \_\_\_\_\_  
H Min




\_\_\_\_\_ : \_\_\_\_\_



\_\_\_\_\_ : \_\_\_\_\_



\_\_\_\_\_ : \_\_\_\_\_



\_\_\_\_\_ : \_\_\_\_\_

Name : \_\_\_\_\_

Score : 0/9

Teacher : Mr. Battaglia

Date : Time


What Time Is It ?



2:05



\_\_\_\_\_  
hour min



\_\_\_\_\_




\_\_\_\_\_




\_\_\_\_\_




\_\_\_\_\_



\_\_\_\_\_



\_\_\_\_\_



\_\_\_\_\_

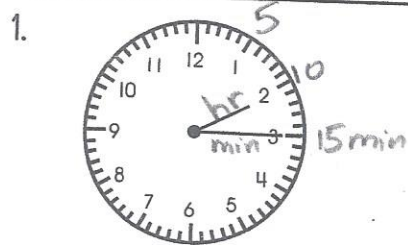




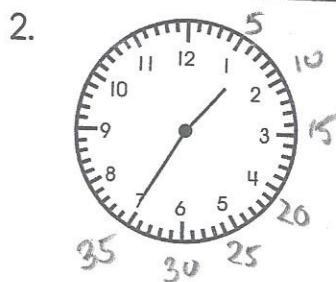
Name \_\_\_\_\_

2.MD.7

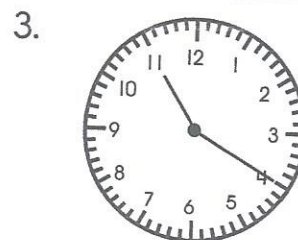
Write the time shown on each clock.




2:15



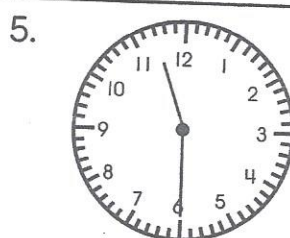
\_\_\_\_\_



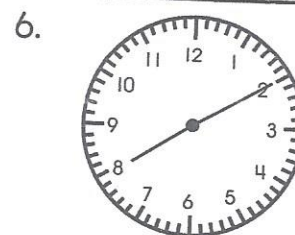
\_\_\_\_\_



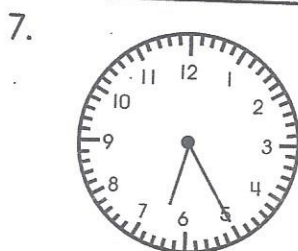
\_\_\_\_\_



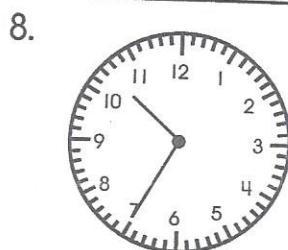
\_\_\_\_\_



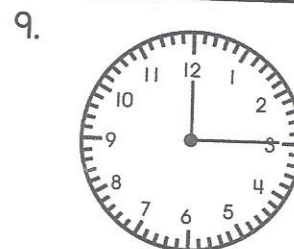
\_\_\_\_\_



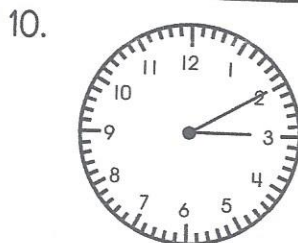
\_\_\_\_\_



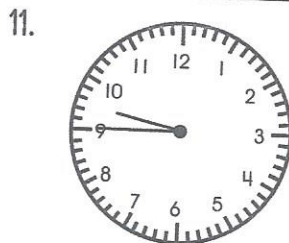
\_\_\_\_\_




\_\_\_\_\_



\_\_\_\_\_



\_\_\_\_\_



\_\_\_\_\_

☐ I can tell and write time to the nearest five minutes.

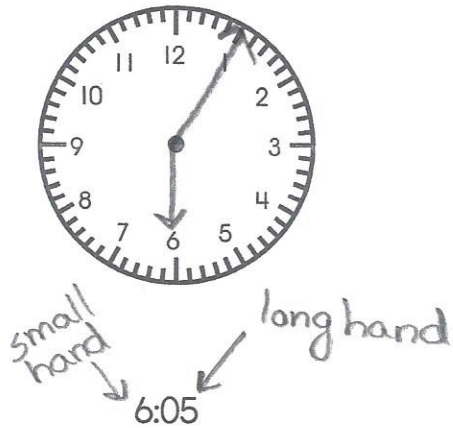


OPTIONAL



Draw the hands on each clock to show the time.


1.



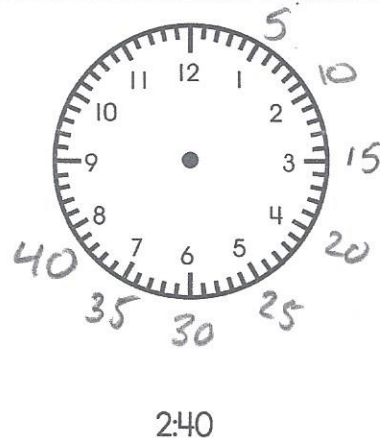
2.




3.



4.




5.



11:20

6.



3:55



I can tell and write time to the nearest five minutes.








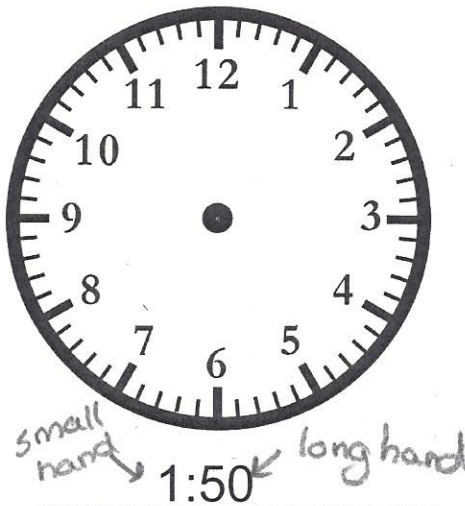

Name : \_\_\_\_\_

Score : 19

Teacher : Mr. Battaglia

Date : Time:

Draw the Hands on the Clock Face

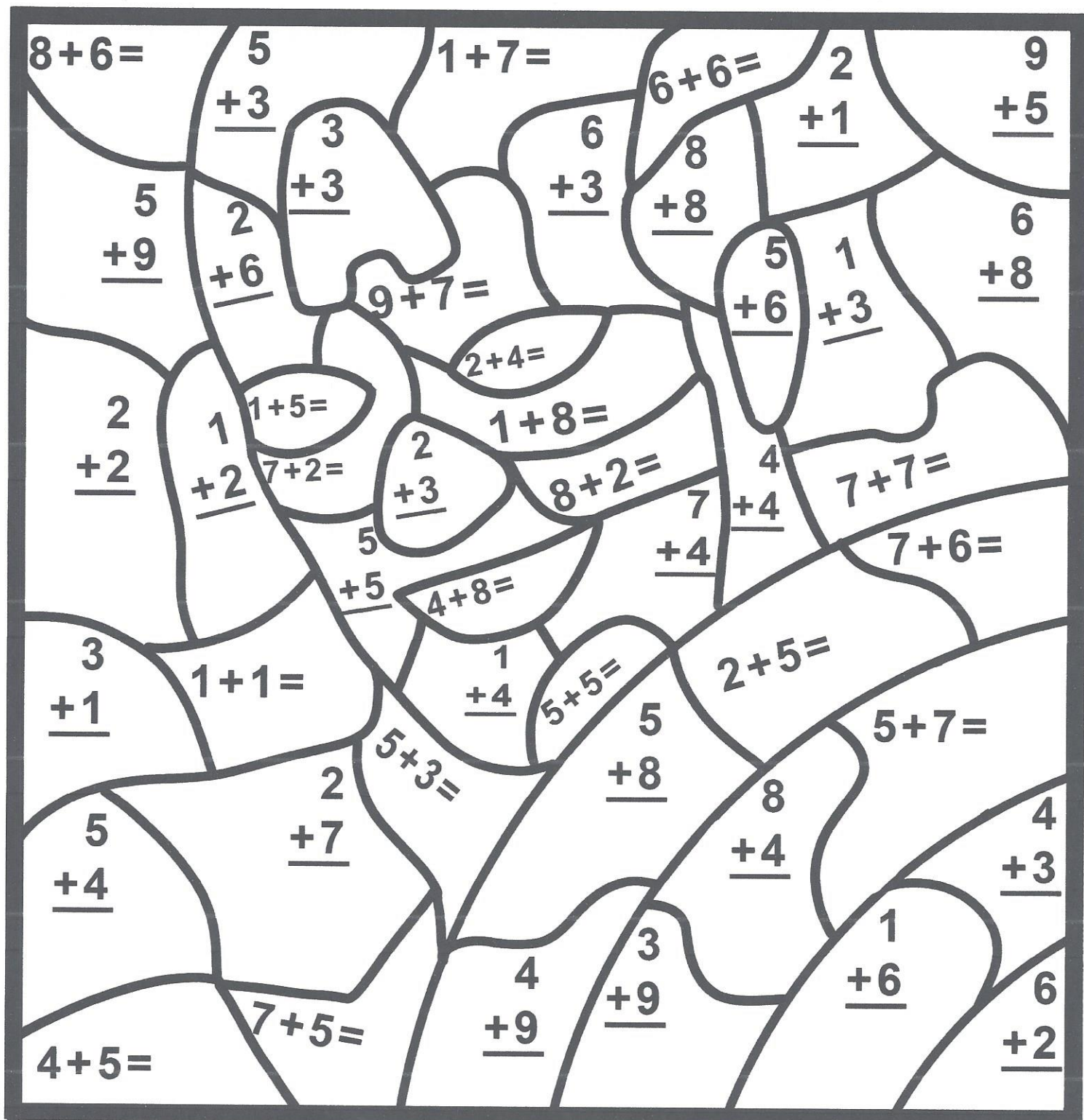




Name \_\_\_\_\_

OPTIONAL

Solve and Color the Picture!



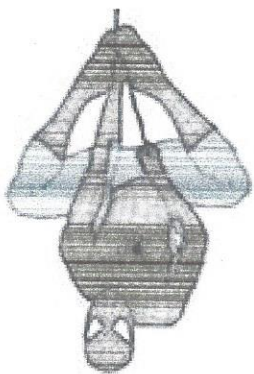
RED: 7, 13

GREEN: 2, 3, 4, 14

WHITE: 6, 12

PEACH: 5, 10, 11

BLUE: 8, 9, 16



# SUPERHERO WORD SEARCH

Created by Great Kids Birthday Parties.com

Optional

P H Z O O G X I F L E Q L X M  
A Q U A M A N H U L K Q C H T  
I S P I D E R M A N C A X S H  
C A P T A I N A M E R I C A O  
F C W J J Q B B B A T M A N R  
R D X I S U P E R M A N B E R  
G R E E N L A N T E R N R K A  
I P H S S U P E R H E R O E S  
H O F W I R O N M A N L L M X  
I V L Q T B Y V D E V U E C N  
B L A C K P A N T H E R L Q O  
B X S Z D A R E D E V I L M N  
Z T H Z U W O L V E R I N E I  
D O N W O N D E R W O M A N A  
A Z M C P E Q T Z K A N C K I

Iron Man

Thor

Superheroes

Spiderman

Aquaman

Superman

Hulk

Wolverine

Flash

Wonder Woman

Batman

Captain America

Black Panther

Green Lantern

Daredevil

