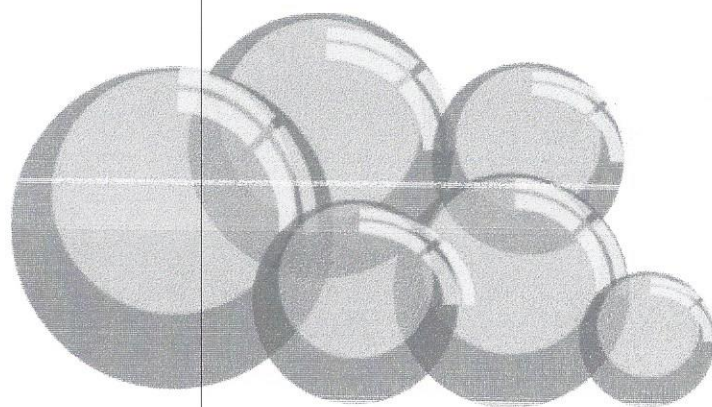


Mr. Battaglia's May Math Packet



Grade 1

Name: _____














Name _____

I.OA.6

Add and Color

13 = Pink 14 = Yellow 15 = Orange 16 = Blue 17 = Purple 18 = Red



Solve the addition problems and color the flowers according to the code above.

Name _____

I.OA.6

Addition Facts



$$\begin{array}{r} 6 \\ + 9 \\ \hline \end{array}$$

$$\begin{array}{r} 4 \\ + 3 \\ \hline \end{array}$$

$$\begin{array}{r} 4 \\ + 8 \\ \hline \end{array}$$

$$\begin{array}{r} 2 \\ + 3 \\ \hline \end{array}$$

$$\begin{array}{r} 16 \\ + 2 \\ \hline \end{array}$$

$$\begin{array}{r} 4 \\ + 4 \\ \hline \end{array}$$

$$\begin{array}{r} 6 \\ + 3 \\ \hline \end{array}$$

$$\begin{array}{r} 5 \\ + 4 \\ \hline \end{array}$$

$$\begin{array}{r} 9 \\ + 7 \\ \hline \end{array}$$

$$\begin{array}{r} 3 \\ + 5 \\ \hline \end{array}$$

$$\begin{array}{r} 5 \\ + 2 \\ \hline \end{array}$$

$$\begin{array}{r} 2 \\ + 6 \\ \hline \end{array}$$

$$\begin{array}{r} 10 \\ + 1 \\ \hline \end{array}$$

$$\begin{array}{r} 4 \\ + 4 \\ \hline \end{array}$$

$$\begin{array}{r} 20 \\ + 0 \\ \hline \end{array}$$


Solve the addition problems as quickly as you can.

Name _____

I.OA.2

© Kendra's Kindergarten 2016

Addition Word Problems



Julie caught 3 yellow butterflies, 6 pink butterflies, and 4 purple butterflies. How many butterflies did she catch in all?

$$\square + \square + \square = \square \text{ butterflies}$$

- Fiona ate 14 tacos on Monday, Tuesday, and Wednesday. She ate 4 tacos on Monday and 7 on Tuesday. How many tacos did she eat on Wednesday?

$$\square + \square + \square = \square \text{ tacos}$$

Piper grew 15 flowers in her garden. 6 flowers are pink. 5 flowers are purple. How many of Piper's flowers are not pink or purple?

$$\square + \square + \square = \square \text{ flowers}$$

Lupe watched her chicken eggs hatch. 4 chicks hatched on Monday, 3 chicks hatched on Wednesday, and 8 chicks hatched Friday. How many chicks hatched all together?

$$\square + \square + \square = \square \text{ chicks}$$

Solve the addition word problems.

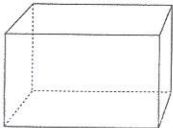
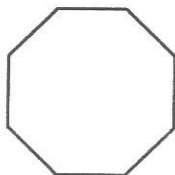


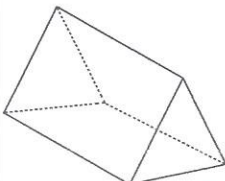

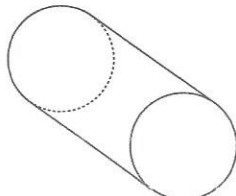

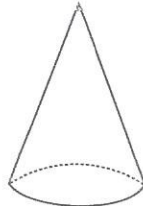
Name _____

1.G.1



Defining Attributes

Circle the correct answer.

<p>rectangular prism</p>  <p>2 D Shape or 3D Shape</p>	<p>octagon</p>  <p>8 sides or 4 sides</p>	<p>sphere</p>  <p>0 sides or 1 side</p>
<p>rectangle</p>  <p>2D Shape or 3D shape</p>	<p>prism</p>  <p>2D Shape or 3D Shape</p>	<p>square</p>  <p>4 angles or 2 angles</p>
<p>cylinder</p>  <p>Same shape as:</p> <p>a roll of toilet paper</p> <p>or</p> <p>a box of tissues</p>	<p>triangle</p>  <p>2D or 3D Shape</p>	<p>cone</p>  <p>Same Shape As:</p> <p>a basketball</p> <p>or</p> <p>A party hat</p>

© Kendra's Kindergarten 2015

• Write one defining attribute for each shape.

Name _____
I.OA.I



Double Digit Addition

~~$$\begin{array}{r} 63 \\ + 38 \\ \hline \end{array}$$~~

$$\begin{array}{r} \text{t.o} \\ 23 \\ + 34 \\ \hline 57 \end{array}$$

$$\begin{array}{r} 75 \\ + 32 \\ \hline \end{array}$$

$$\begin{array}{r} 14 \\ + 23 \\ \hline \end{array}$$

$$\begin{array}{r} 54 \\ + 21 \\ \hline \end{array}$$

$$\begin{array}{r} 56 \\ + 30 \\ \hline \end{array}$$

$$\begin{array}{r} 43 \\ + 76 \\ \hline \end{array}$$

$$\begin{array}{r} 22 \\ + 45 \\ \hline \end{array}$$

$$\begin{array}{r} 55 \\ + 31 \\ \hline \end{array}$$

$$\begin{array}{r} 97 \\ + 32 \\ \hline \end{array}$$

$$\begin{array}{r} 52 \\ + 43 \\ \hline \end{array}$$

$$\begin{array}{r} 33 \\ + 65 \\ \hline \end{array}$$

$$\begin{array}{r} 21 \\ + 13 \\ \hline \end{array}$$

$$\begin{array}{r} 45 \\ + 22 \\ \hline \end{array}$$

$$\begin{array}{r} 47 \\ + 80 \\ \hline \end{array}$$

~~$$\begin{array}{r} 89 \\ + 24 \\ \hline \end{array}$$~~

$$\begin{array}{r} 44 \\ + 31 \\ \hline \end{array}$$

$$\begin{array}{r} 56 \\ + 32 \\ \hline \end{array}$$

~~$$\begin{array}{r} 78 \\ + 43 \\ \hline \end{array}$$~~

$$\begin{array}{r} 33 \\ + 44 \\ \hline \end{array}$$

Solve the addition problems.







Name _____

Ash for family and friends
~~their favorite Cinco de Mayo~~

© Keshia's Kindergarten 2016

I.MD.4

What is your favorite Mexican food?

				X	
				X	
	X			X	X
X	X			X	X
X	X	X		X	X
					
Tortilla Chips	Burritos	Tacos	Peppers	Quesadilla	Avocado

1st graders voted on their favorite foods. See the results above.

Which food is the favorite? _____

Which food is the least favorite? _____


How many votes did tacos get? _____

How many votes did burritos get? _____

Ask your classmates what their favorite Mexican food is. Record the results on the graph and answer the questions.

Name _____

I.OA.6



Subtraction Facts

$$\begin{array}{r} 13 \\ - 4 \\ \hline \end{array}$$

$$\begin{array}{r} 10 \\ - 6 \\ \hline \end{array}$$

$$\begin{array}{r} 8 \\ - 5 \\ \hline \end{array}$$

$$\begin{array}{r} 9 \\ - 4 \\ \hline \end{array}$$

$$\begin{array}{r} 12 \\ - 10 \\ \hline \end{array}$$

$$\begin{array}{r} 6 \\ - 6 \\ \hline \end{array}$$

$$\begin{array}{r} 12 \\ - 2 \\ \hline \end{array}$$

$$\begin{array}{r} 17 \\ - 1 \\ \hline \end{array}$$

$$\begin{array}{r} 11 \\ - 7 \\ \hline \end{array}$$

$$\begin{array}{r} 10 \\ - 5 \\ \hline \end{array}$$

$$\begin{array}{r} 8 \\ - 2 \\ \hline \end{array}$$

$$\begin{array}{r} 9 \\ - 6 \\ \hline \end{array}$$

$$\begin{array}{r} 10 \\ - 4 \\ \hline \end{array}$$

$$\begin{array}{r} 7 \\ - 6 \\ \hline \end{array}$$

$$\begin{array}{r} 13 \\ - 2 \\ \hline \end{array}$$

Solve the subtraction problems as quickly as you can.